

20
PUZZEL

Jacqueline heeft twee hele getallen in haar hoofd en laat Gerard raden welke dat zijn. Ze geeft hem maar één hint: het product van de getallen is drie keer zo groot als de som.

Welke getallen heeft Jacqueline in haar hoofd?

22
PUZZEL

Wat moet logischerwijs op de plaats van het vraagteken komen?

J	F	M	A
M	J	J	A
S	O	N	?

21
PUZZEL

Welk getal maakt de puzzel compleet?

- 63**
- 23**
- 82**
- 42**
- 02**
- 61**
- ?**

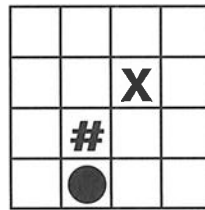
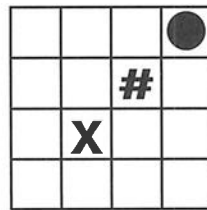
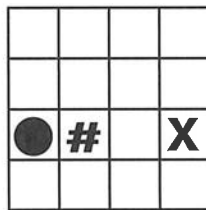
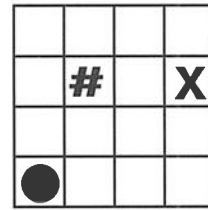
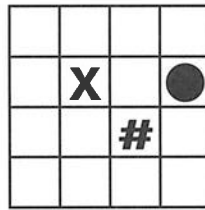
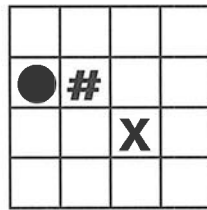


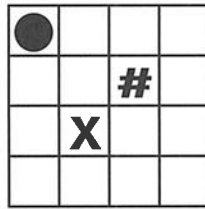
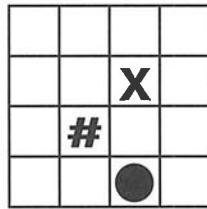
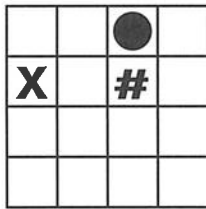
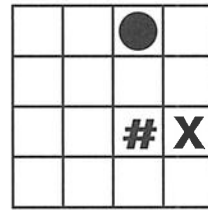

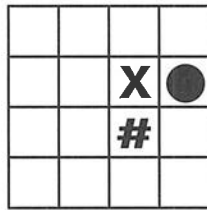

23
PUZZEL

Welke drie getallen ontbreken in dit patroon?

2	5	13	29	12	4	21	16	15
3	11	23	8	30	19	14	11	12
7	19	6	24	15	10	9	10	11
17	4	20	13	8	7	8	9	10
3	18	9	6	6	7	8	9	10
14	7	5	32	33	34	35	36	37
5	?	26	27	28	29	30	31	28
25	22	23	24	25	26	27	26	21
20	21	22	23	24	25	22	17	13
17	18	19	20	21	20	15	?	24
16	17	18	19	?	13	33	22	40
13	14	15	14	12	29	18	34	17
12	13	12	38	27	16	30	15	23
11	11	32	23	14	28	14	19	25

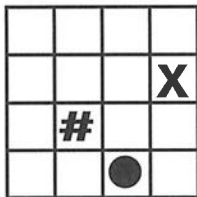
1
PUZZEL

Welk van de patronen A-D maakt onderstaande reeks af?




?

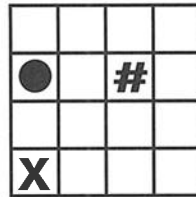
A



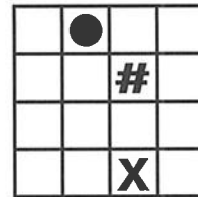
B



C




D



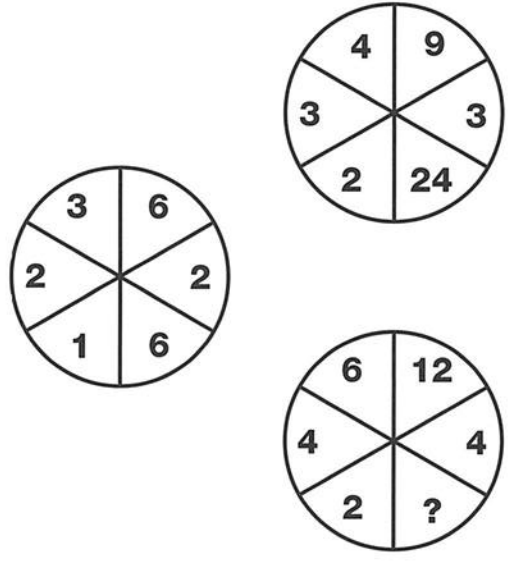
2
PUZZEL

Welke letter maakt de puzzel compleet?



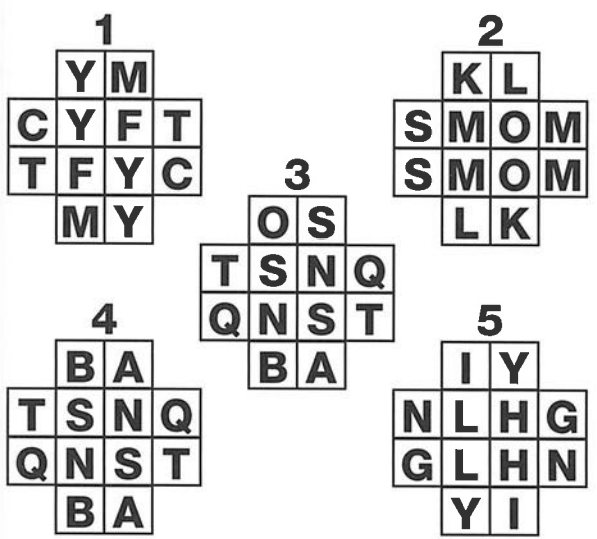

3
PUZZEL

Wat moet logischerwijs op de plaats van het vraagteken komen?



4
PUZZEL

Welk puzzelstuk moet op de plaats van het zwarte kruis komen?



5
PUZZEL

Welke letters ontbreken hier?

B	G	L	T	E	S	J	D	A
W	E	J	O	W	H	V	M	G
O	Z	H	M	R	Z	K	Y	P
D	R	C	K	P	U	C	N	?
P	G	U	F	N	S	X	F	Q
Y	S	J	X	I	Q	V	A	I
E	B	V	M	A	L	T	Y	?

6
PUZZEL


Welke letter moet op de plaats van het vraagteken komen?

<table border="1"> <tr><td>A</td><td>B</td></tr> <tr><td>B</td><td>C</td></tr> </table>	A	B	B	C	<table border="1"> <tr><td>C</td><td>C</td></tr> <tr><td>A</td><td>C</td></tr> </table>	C	C	A	C	<table border="1"> <tr><td>B</td><td>F</td></tr> <tr><td>C</td><td>A</td></tr> </table>	B	F	C	A
A	B													
B	C													
C	C													
A	C													
B	F													
C	A													
<table border="1"> <tr><td>F</td><td>D</td></tr> <tr><td>B</td><td>B</td></tr> </table>	F	D	B	B	<table border="1"> <tr><td>D</td><td>D</td></tr> <tr><td>G</td><td>?</td></tr> </table>	D	D	G	?					
F	D													
B	B													
D	D													
G	?													



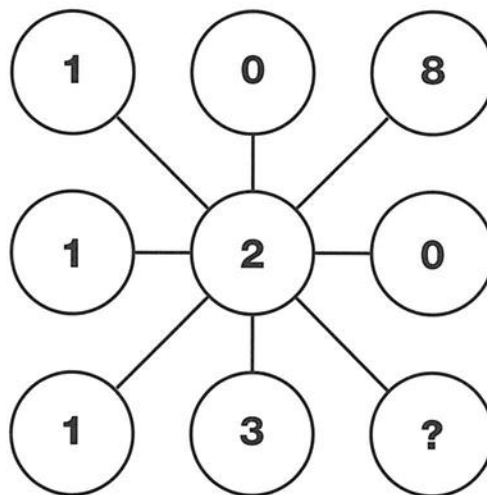
**7
PUZZEL**

Welke letter ontbreekt in dit vierkant?



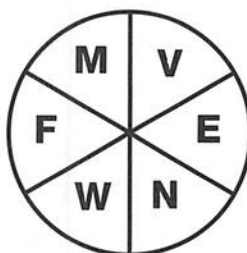

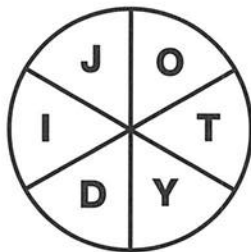
**8
PUZZEL**

Welk cijfer maakt de puzzel compleet?



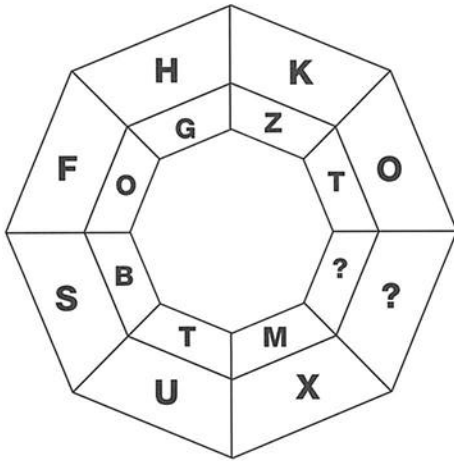
**9
PUZZEL**

Wat ontbreekt op de plaats van het vraagteken?



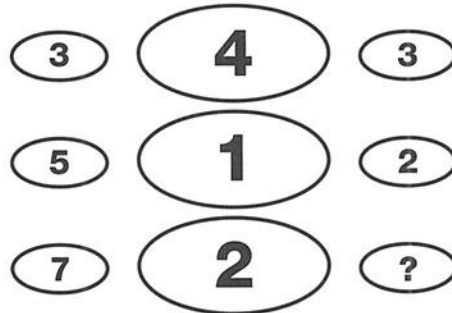
10
PUZZEL

Welke letters ontbreken in deze figuur?



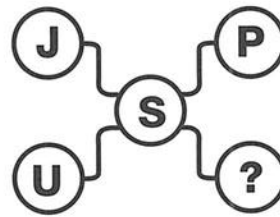
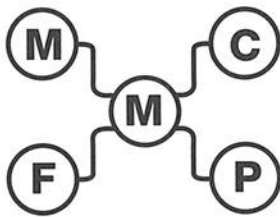
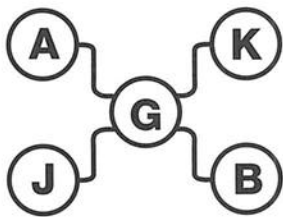
11
PUZZEL

Wat moet op de plaats van het vraagteken komen?



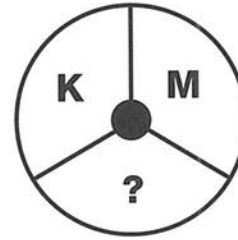
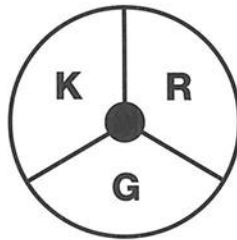
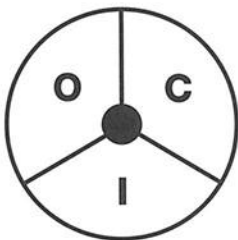
12
PUZZEL

Wat moet logischerwijs op de plaats van het vraagteken komen?



13
PUZZEL

Welke letter ontbreekt in de rechtercirkel?



14
PUZZEL

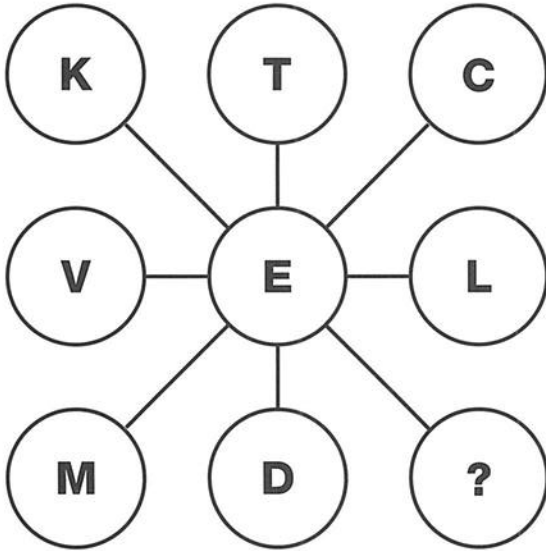
Welk van de patronen A-D maakt de volgende reeks af?

			?

A 	B 	C 	D
--------------	--------------	--------------	--------------

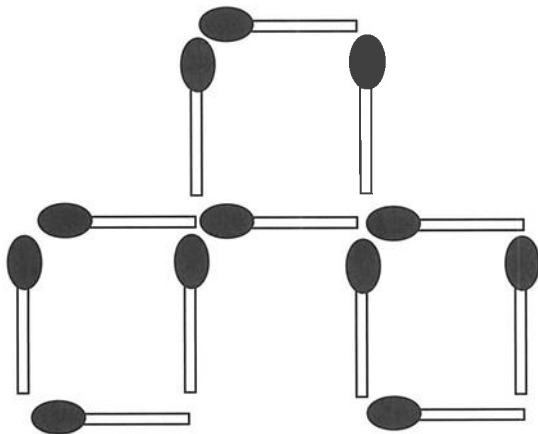
**15
PUZZEL**

Welke letter maakt de puzzel compleet?



**17
PUZZEL**

Verplaats 4 lucifers om 7 vierkanten te maken.
Kunt u door het verplaatsen van 4 lucifers ook
10 vierkanten maken?



**16
PUZZEL**

Wat moet logischerwijs op de plaats
van het vraagteken komen?

1728

2197

2744

3375

4096

?

18
PUZZEL

Welke letter maakt de puzzel compleet?

H	E	L	C	Q	F
N		L		D	
		J		G	
		?			

19
PUZZEL

Hoeveel is de helft van twee derde van drie vierde van vier vijfde van vijf zesde van zes zevende van zeven achtste van acht negende van negen tiende van honderd?



20
PUZZEL

Wat moet logischerwijs op de plaats van het vraagteken komen?

I	C	J	C
H	?	B	N
D	F	H	?
D	O	E	A

21
PUZZEL

Welke vier letters ontbreken hier?



N I V E A U

17

161






1
PUZZEL

Welk van de patronen moet op de plaats van het vraagteken komen om de reeks af te maken?

			?
A 	B 	C 	D




5
PUZZEL

Welk cijfer maakt de puzzel compleet?



6
PUZZEL

Wat moet logischerwijs op de plaats van het vraagteken komen?



7
PUZZEL

Welke drie letters ontbreken hier?

A	F	K	T	Z	K	X	I	W
E	I	N	Y	I	W	H	V	?
H	M	X	H	V	F	T	E	M
L	W	F	T	E	N	A	L	?
V	E	N	A	M	Z	K	V	Z
A	M	Z	L	Y	I	T	Y	?
L	Y	K	X	H	N	X	A	F

8
PUZZEL

Wat moet op de plaats van het vraagteken komen?


9	4	9
8	8	10
7	5	8
1	4	4
3	8	?

N
I
V
E
A
U



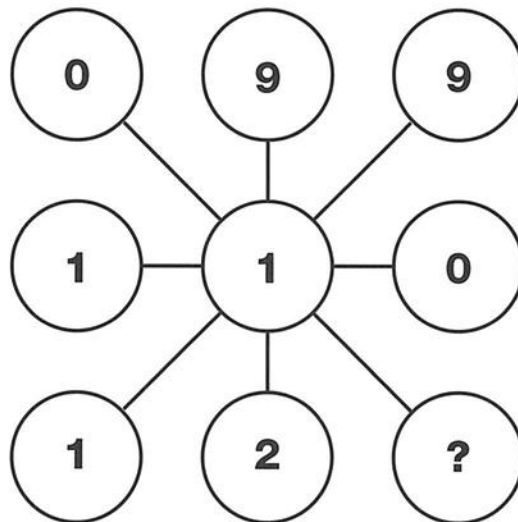
9
PUZZEL

Welke letter maakt dit vierkant compleet?



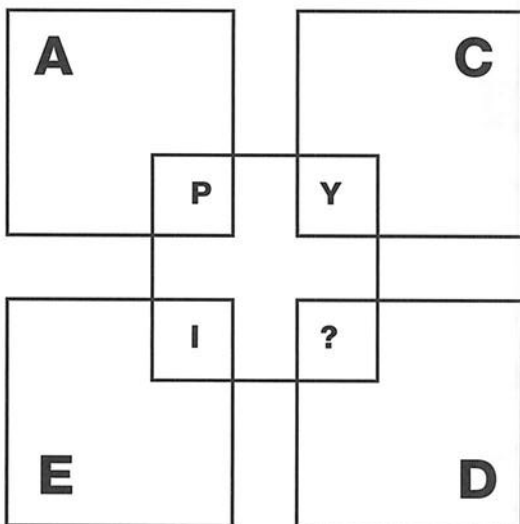
10
PUZZEL

Welk cijfer maakt de puzzel compleet?



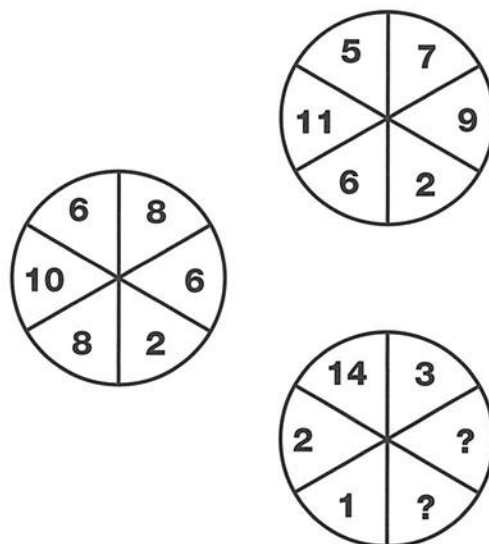
11
PUZZEL

Welke letter maakt de puzzel compleet?



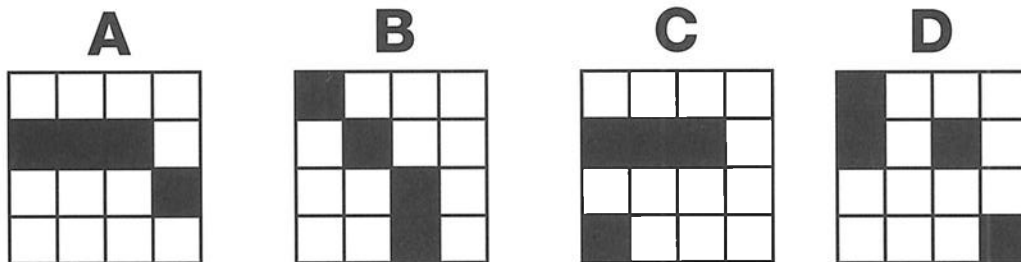

12
PUZZEL

Wat moet logischerwijs op de plaats van het vraagteken komen?




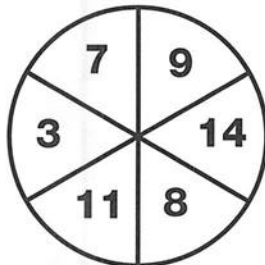
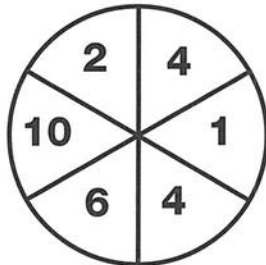
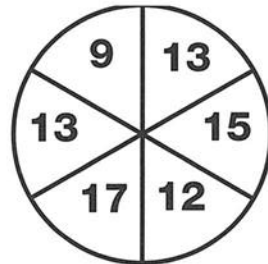
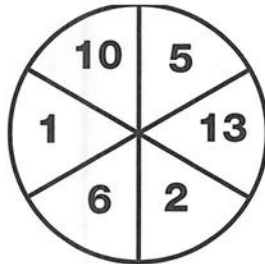
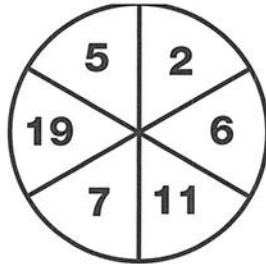
13
PUZZEL

Welk van de patronen A–D maakt de reeks af?



14
PUZZEL

Welk getal maakt de puzzel compleet?



15
PUZZEL

Welke letter maakt de puzzel compleet?

A	K	J
M	U	H
U	X	?


16
PUZZEL

Wat moet logischerwijs op de plaats van het vraagteken komen?

1	5	15	4
7	8	6	4
14	?	1	8
3	10	3	?

17
PUZZEL

Welke drie letters moeten op de plaats van de vraagtekens komen?





**18
PUZZEL**

Hieronder ziet u twee optellingen met verschillende uitkomsten. Kunt u een cijfer wijzigen o de uitkomsten gelijk te maken?

$$\begin{array}{r} 2 \\ 8 \\ 3 \\ 1 \\ 7 \\ \hline 21 \end{array}$$

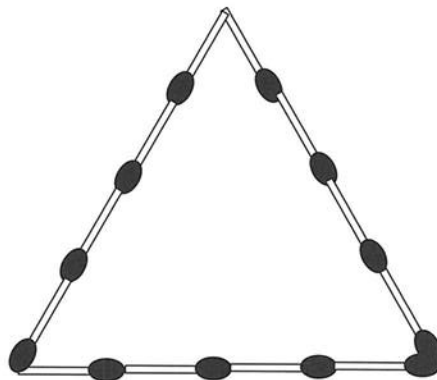
$$\begin{array}{r} 6 \\ 4 \\ 5 \\ 9 \\ \hline 24 \end{array}$$

**20
PUZZEL**

Als 6 mensen een gemiddelde leeftijd van 21 jaar hebben en elke persoon half zo oud is als de volgende, wat zijn dan de leeftijden van deze 6 mensen?

**19
PUZZEL**

Hier is met 12 lucifers een gelijkzijdige driehoek gevormd. Kunt u door het verplaatsen van 4 lucifers de door de driehoek ingesloten ruimte halveren? Als dat lukt, kunt u dan door het verplaatsen van 6 lucifers van de oorspronkelijke driehoek de ingesloten ruimte tot een kwart te reduceren?



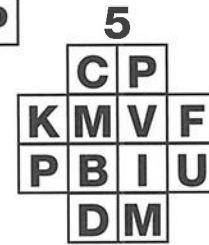




**21
PUZZEL**

Welk getal maakt de puzzel compleet?

1	4	4	2
2	1	4	9
2	8	5	6
3	5	6	?

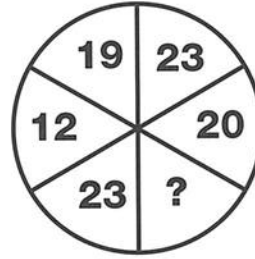
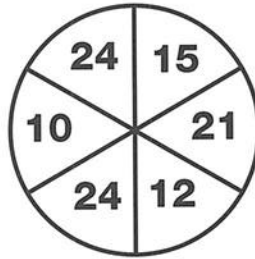
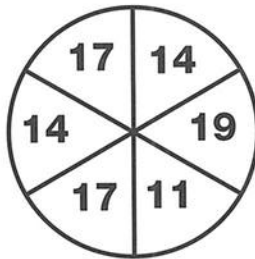
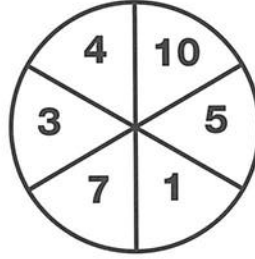
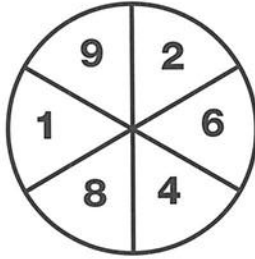
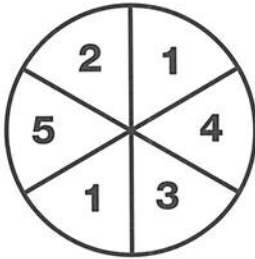
1 PUZZEL

Welk puzzelstuk past op de plaats van het zwarte kruis?



2 PUZZEL

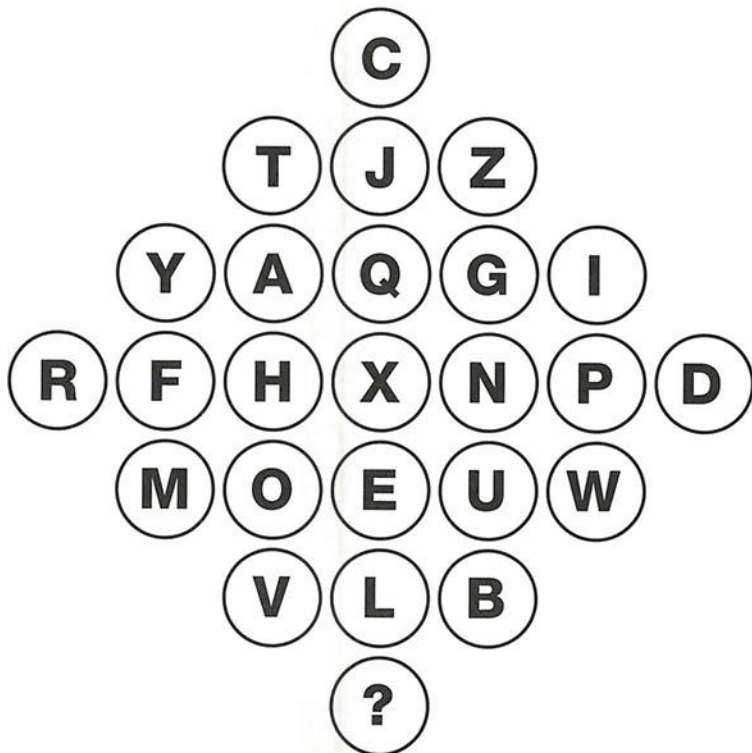
Wat moet logischerwijs op de plaats van het vraagteken komen?





3
PUZZEL




Welke letter maakt de puzzel compleet?



- (K) (X) (H) (T) (U) (Z) (S) (B)


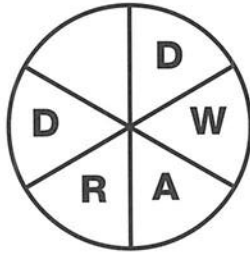
4
PUZZEL

Welk cijfer maakt de puzzel compleet?



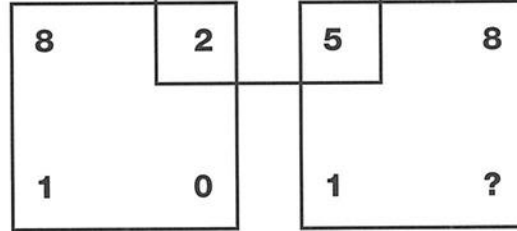
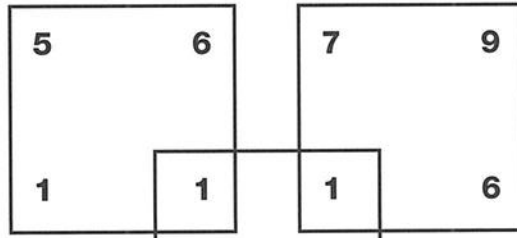
5
PUZZEL

Vul de ontbrekende letters in.




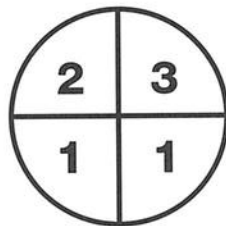
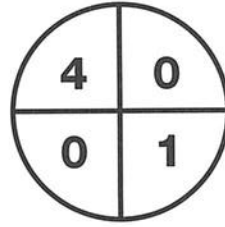
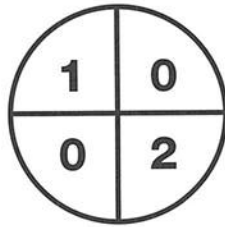
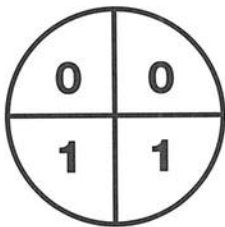
6
PUZZEL

Welk cijfer ontbreekt?



7
PUZZEL

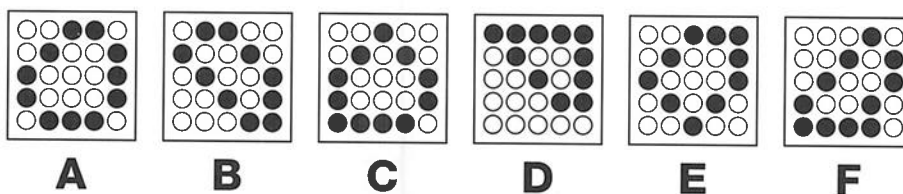
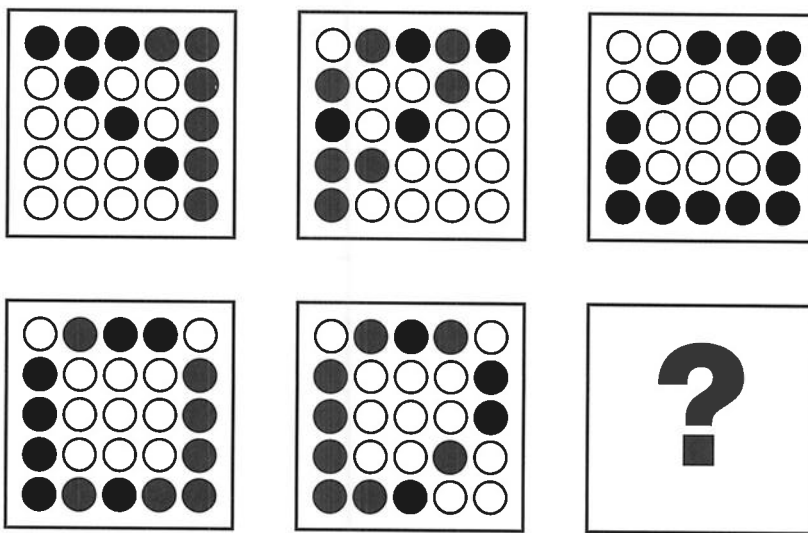
Wat moet logischerwijs op de plaats van het vraagteken komen?






8
PUZZEL

Welk patroon moet op de plaats van het vraagteken komen?



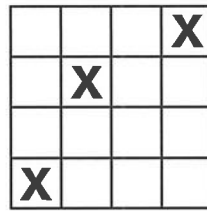
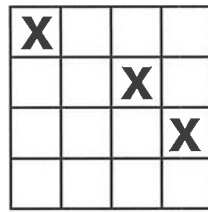
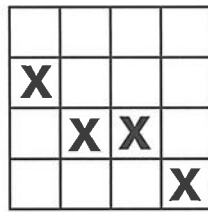
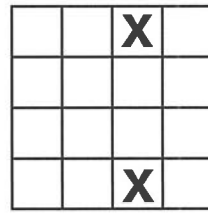
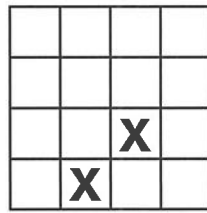
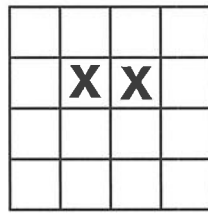
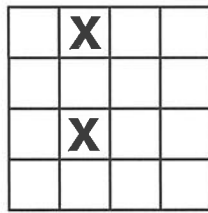
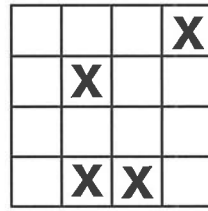
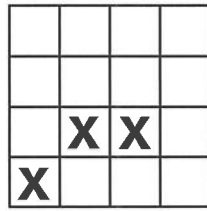
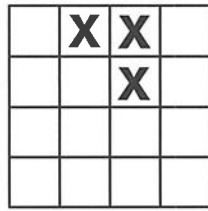

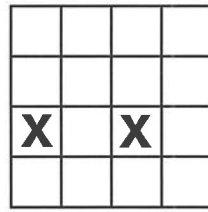
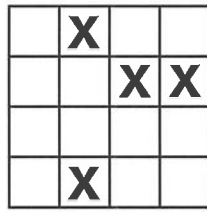
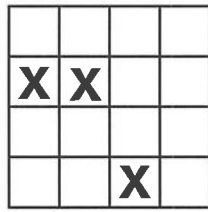
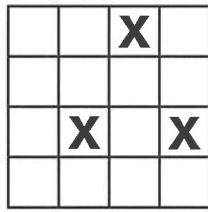
9
PUZZEL

Wat moet logischerwijs op de plaats van het vraagteken komen?



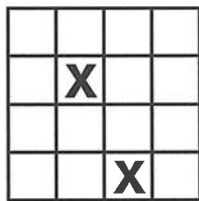
10 PUZZEL

Welk van de patronen A-D moet op de plaats van het vraagteken komen?

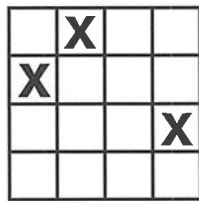


?

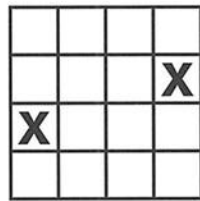
A



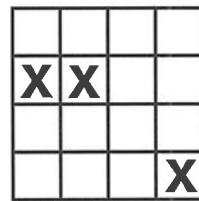
B



C



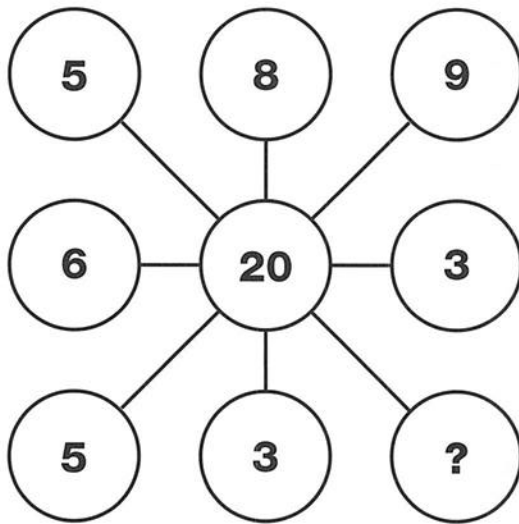
D






**11
PUZZEL**

Wat ontbreekt op de plaats van het vraagteken?



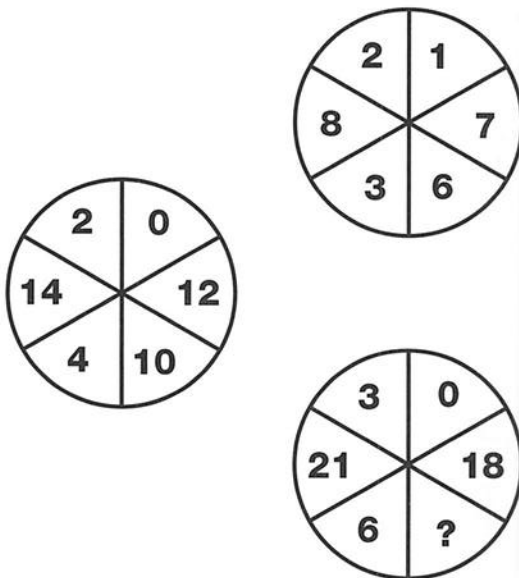
**12
PUZZEL**

Welk getal maakt de puzzel compleet?




**13
PUZZEL**

Wat ontbreekt hier?



**14
PUZZEL**

Wat moet logischerwijs op de plaats van het vraagteken komen?



**15
PUZZEL**

Welk cijfer ontbreekt op de plaats van het vraagteken?

1	0	0	2	5	6
1	2	1	2	8	9
1	4	4	3	2	4
1	6	9	3	6	1
1	9	6	4	0	0
2	2	5	4	4	?

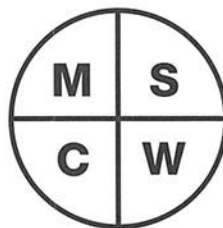
**16
PUZZEL**

Van de 100 leden van een paardrijclub zijn er 60 vrouw, 80 getrouwd, 70 met zwarte laarzen en 90 met zwarte jasjes.

Wat is het minimumaantal getrouwde vrouwen met zwarte laarzen en zwarte jasjes?

**17
PUZZEL**

Welke letter maakt de puzzel compleet?



**18
PUZZEL**

Welke letter maakt de puzzel compleet?

(D)	(F)	(I)	(M)
(C)	(P)	(D)	(R)
(Q)	(I)	(?)	(X)
(F)	(V)	(M)	(E)

**19
PUZZEL**

Welk cijfer maakt de puzzel compleet?

3	4	3
5	1	2
7	?	9

**20
PUZZEL**

Welke letter maakt deze puzzel compleet?

(C)	(M)	(K)
(I)	(C)	(O)
(H)	(?)	(J)



**21
PUZZEL**

Welk cijfer moet logischerwijs op de plaats van het vraagteken komen?

4	0	9	6
4	9	1	3
5	8	3	2
6	?	5	9

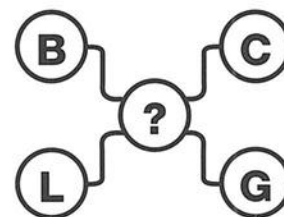
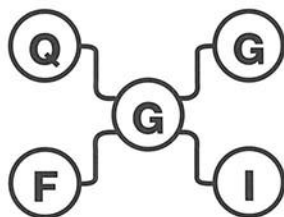
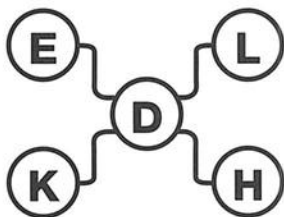
22
PUZZEL

Welk van de onderstaande letters maakt deze puzzel compleet?



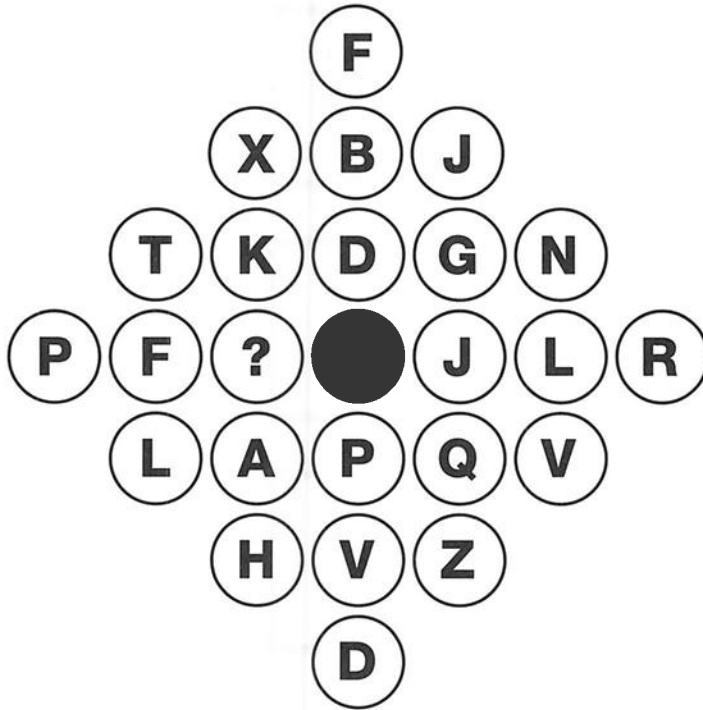
23
PUZZEL

Wat moet logischerwijs op de plaats van het vraagteken komen?




1
PUZZEL

Welke letter maakt de puzzel compleet?



2
PUZZEL

Welke letter moet op de plaats van het vraagteken komen?



3 PUZZEL

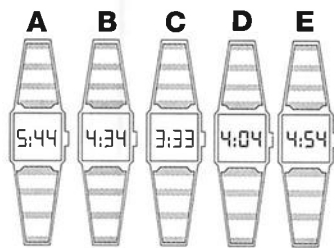
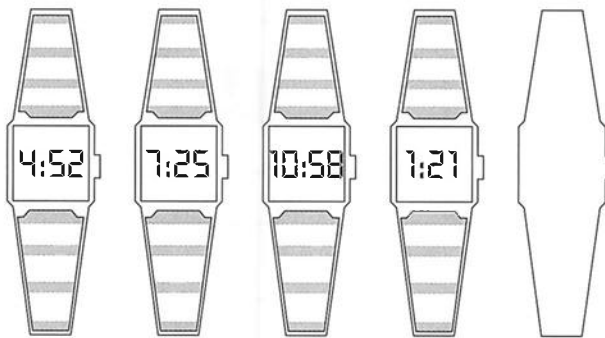
Welk van de patronen A-D maakt onderstaande reeks af?

			?

A	B	C	D

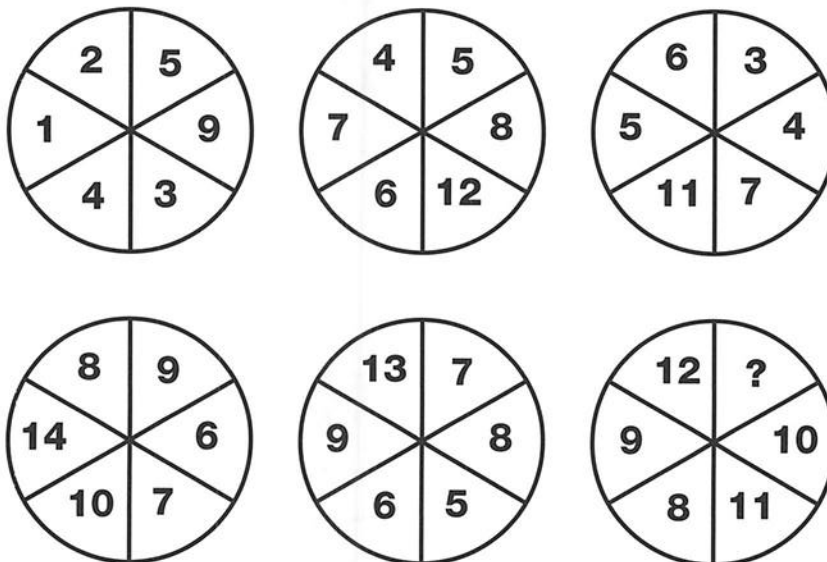
4
PUZZEL

Welk horloge moet op de lege ruimte komen?



5
PUZZEL

Welk getal ontbreekt in de cirkel rechtsonder?



6
PUZZEL

Wat moet logischerwijs op de plaats van het vraagteken komen?

B C

E A

F D

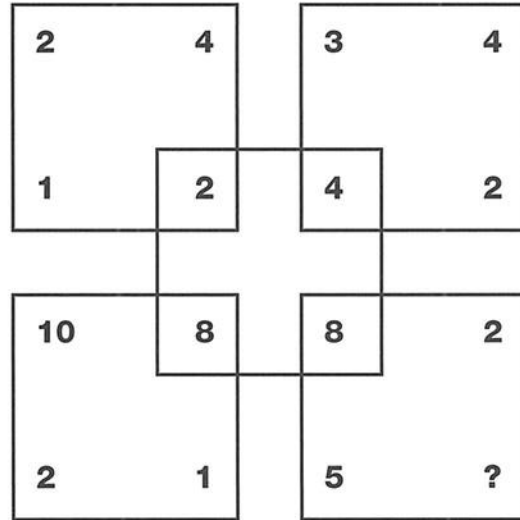
J B

L H

? ?

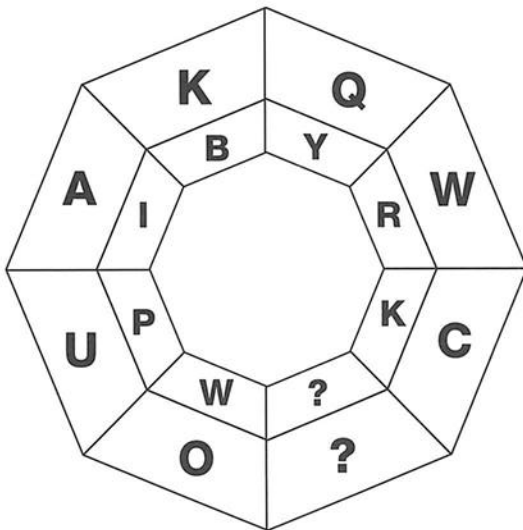
7
PUZZEL

Welk cijfer maakt de puzzel compleet?





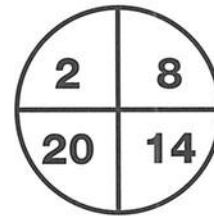
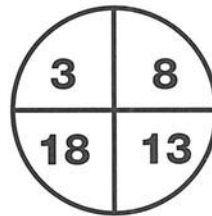
8
PUZZEL

Welke letters ontbreken in deze figuur?



9
PUZZEL

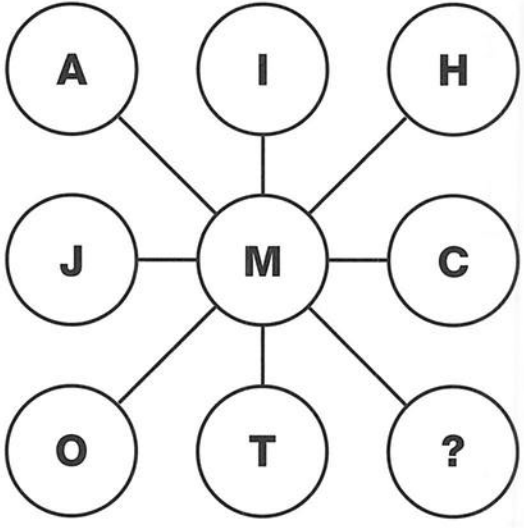
Welk getal ontbreekt in de cirkel rechtsonder?






10
PUZZEL

Welke letter moet op de plaats van het vraagteken komen?





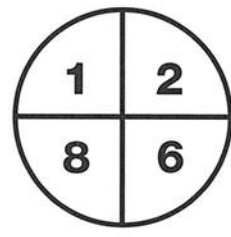
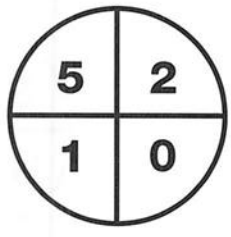

11
PUZZEL

Welke letter maakt de puzzel compleet?




12
PUZZEL

Welk cijfer ontbreekt?



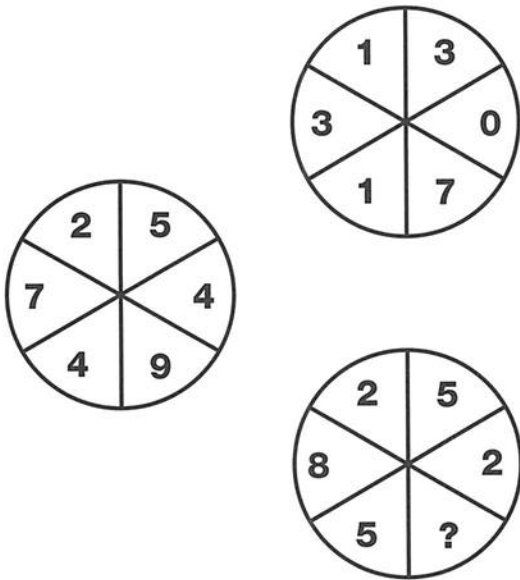
13
PUZZEL

Welk cijfer maakt de puzzel compleet?



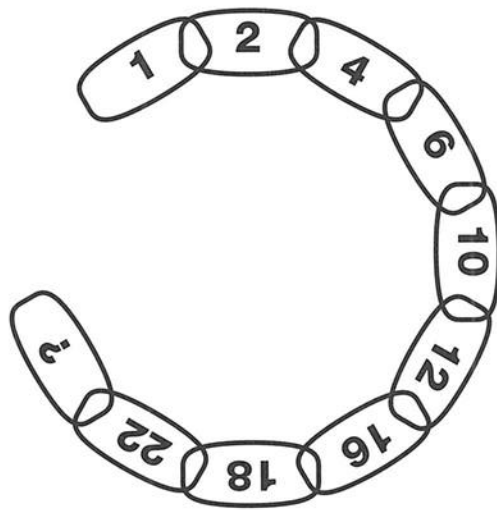
14
PUZZEL

Wat ontbreekt op de plaats van het vraagteken?



15
PUZZEL





Wat moet logischerwijs op de plaats van het vraagteken komen?





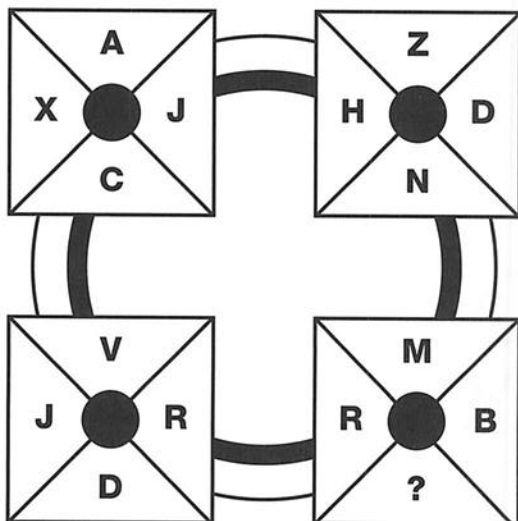
16
PUZZEL

Welk cijfer maakt de puzzel compleet?



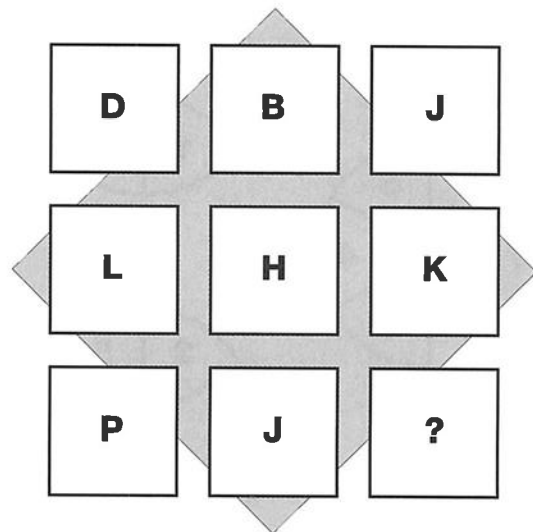
17
PUZZEL

Welke letter maakt deze puzzel compleet?



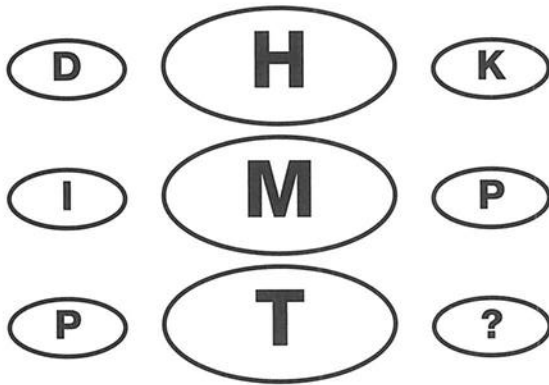
18
PUZZEL

Wat moet logischerwijs op de plaats van het vraagteken komen?



19
PUZZEL

Welke letter maakt de puzzel compleet?



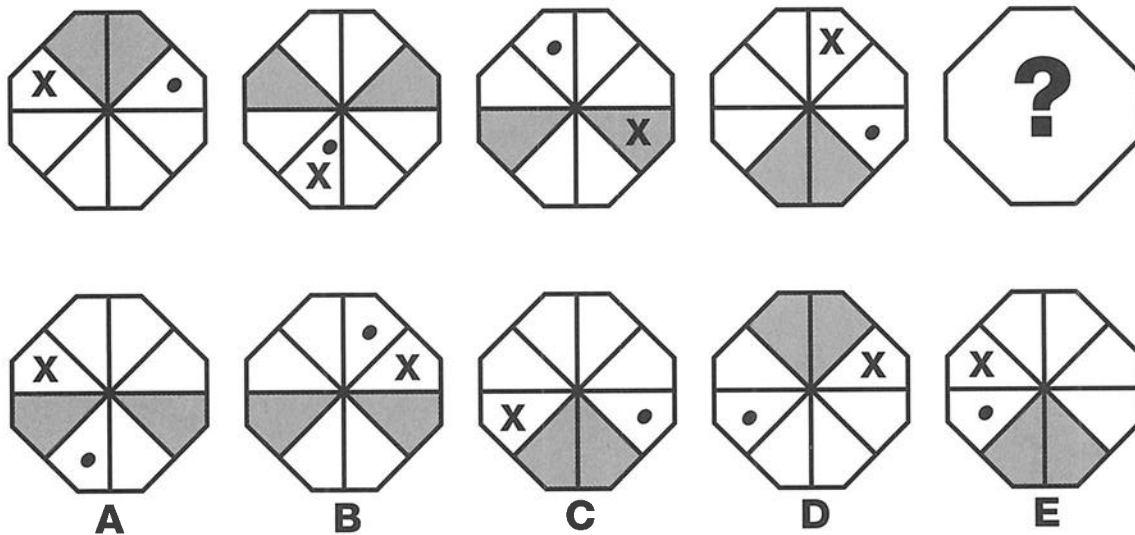
20
PUZZEL

Welk cijfer ontbreekt?

4	1	2	4
1	2	9	4
8	2	6	5
5	3	3	?

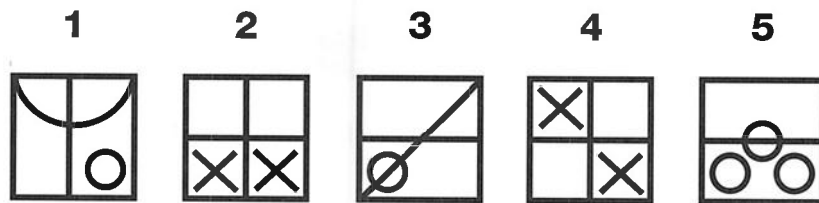
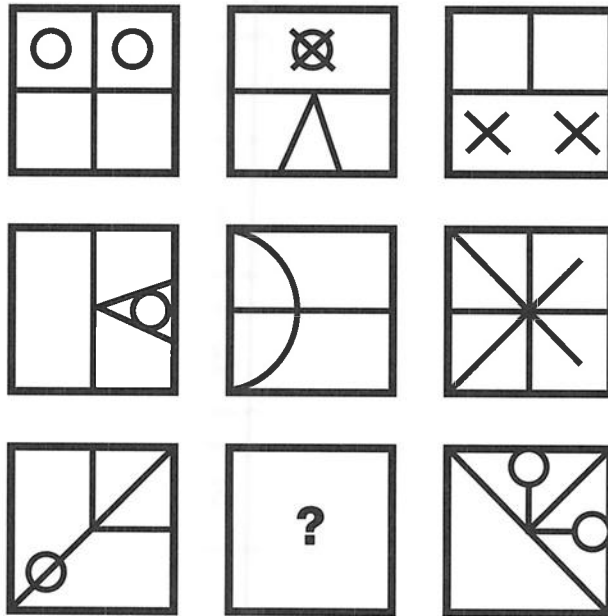
21
PUZZEL

Welk van onderstaande patronen moet op de plaats van het vraagteken komen?



22
PUZZEL

Welk patroon moet op de plaats van het vraagteken komen?



23
PUZZEL

Wat moet logischerwijs op de plaats van het vraagteken komen?

